

Aluno (a):

Nº

Em sala: Atividades.

Resolva as subtrações:

Coloque vírgula debaixo de vírgula e complete as ordens vazias com zeros.

Arme e efetue:

A) $7,846 - 4,8 =$

B) $15,94 - 0,047 =$

C) $0,975 - 0,238 =$

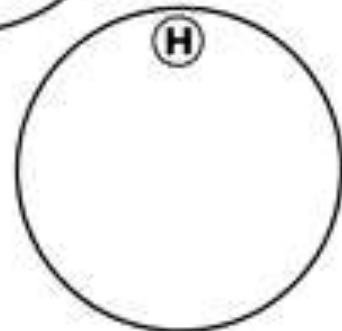
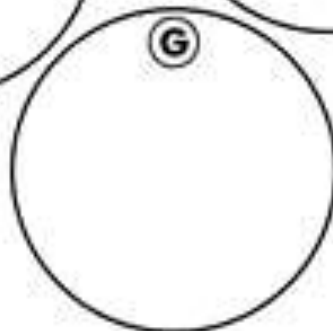
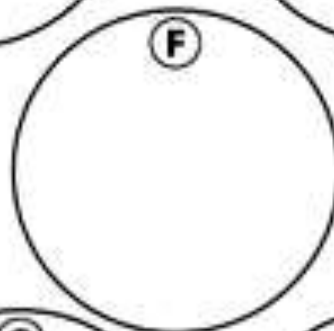
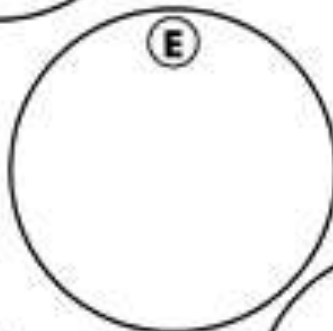
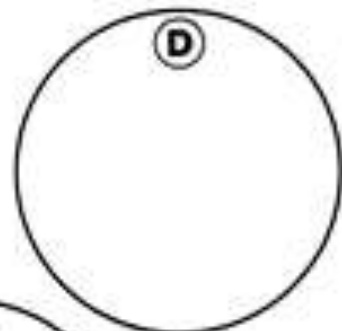
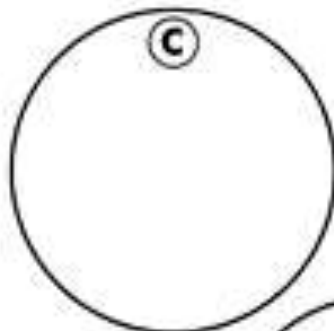
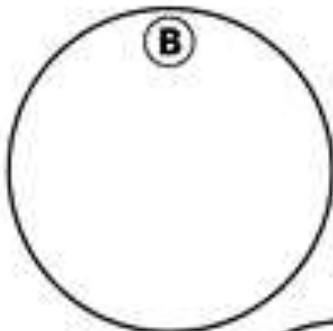
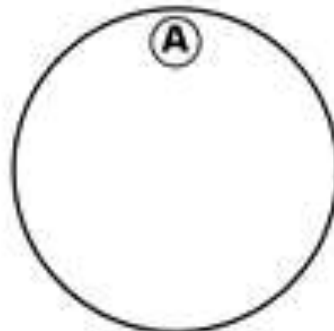
D) $14,632 - 8,109 =$

E) $48 - 2,34 =$

F) $8,15 - 0,043 =$

G) $190,18 - 0,58 =$

H) $12,036 - 4,250 =$



2. Resolva as multiplicações com números decimais:

Agora é sua vez!

a) $3,25 \times 4 =$	b) $1,43 \times 6,4 =$	c) $6,1 \times 8,5 =$
d) $121 \times 2,3 =$	e) $7,80 \times 5 =$	f) $3,67 \times 21 =$

3. Escreva por extenso os números abaixo:

a. 0,6 _____

b. 0,3 _____

c. 1,7 _____

d. 2,0 _____

e. 18,5 _____

4. Escreva os números em algarismos:

a. Cinco unidades, três décimos e dois centésimos _____

b. oito unidades e nove centésimos _____

c. Quatro dezenas e um décimo _____