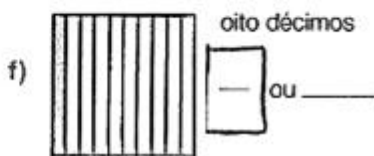
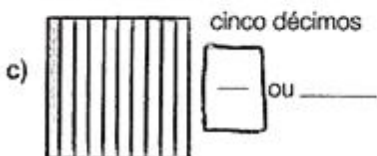
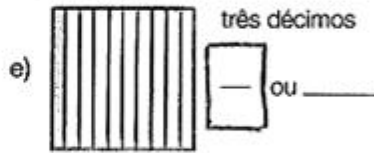
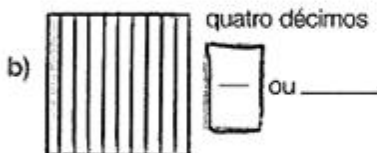
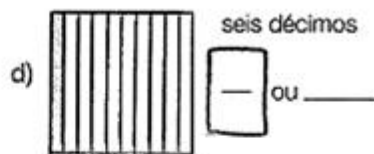
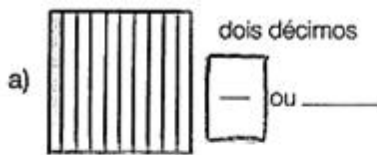


**Em sala:** Livro páginas 69 e 70

- Finalizar com uma revisão.

Atividades

1. Pinte a parte do desenho que se pede e represente a parte colorida:

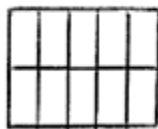


2. Pinte a parte representada de cada desenho:

a) 0,7 da figura



b) 0,7 da figura



c) 0,7 da figura



3. Comprei 3 pedaços de linho de 0,75 m cada um. Quantos metros comprei ao todo?

4. Marina comprou 4 pedaços de renda de 1,35 m cada um. Quantos metros de renda Marina comprou?