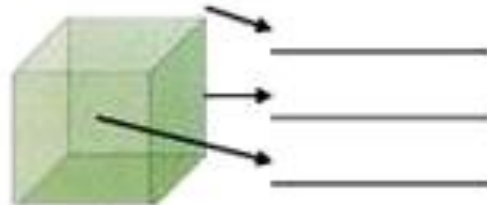
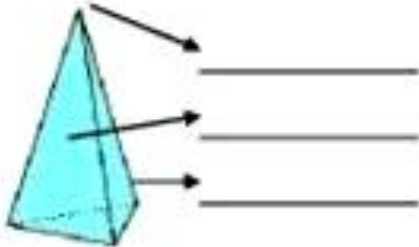


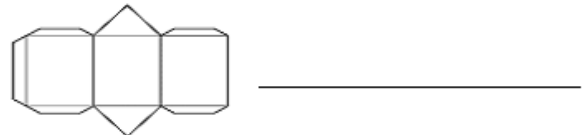

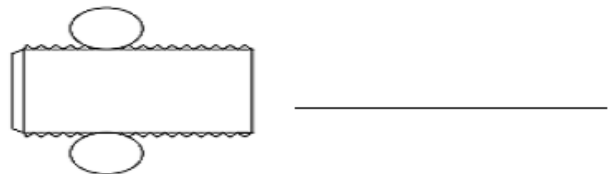
Aluno (a): \_\_\_\_\_

Nº \_\_\_\_\_

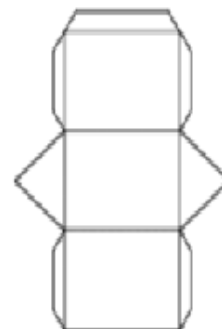
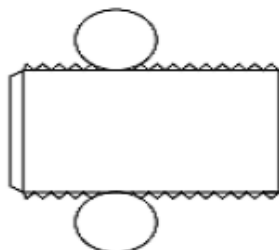
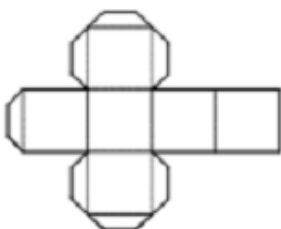

1- Coloque a quantidade de faces, vértices e arestas:



2- Indique a que sólido geométrico corresponde às planificações:



3- Pinte a planificação do poliedro abaixo.



4- A caixa abaixo tem o formato de um:




( ) cubo      ( ) cone      ( ) paralelepípedo      ( ) cilindro

5- O Planeta Terra sugere qual figura espacial? Marque a resposta correta.



( ) pirâmide      ( ) cone      ( ) cilindro      ( ) esfera

6- Qual é o poliedro que está em cima da mesa?



( ) cubo      ( ) cone      ( ) paralelepípedo      ( ) cilindro

7- Circule os objetos que lembram um cone.

