



MATEMÁTICA

2º ano
Prof. Sheila Veríssimo

Lista:

35

Data: 29 / 03 / 2021

Aluno (a): _____

Nº _____

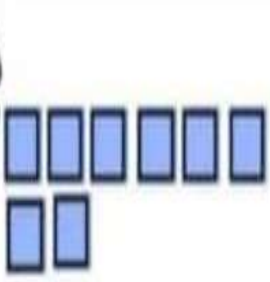

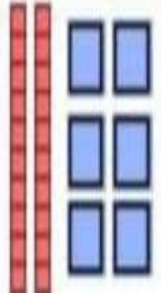
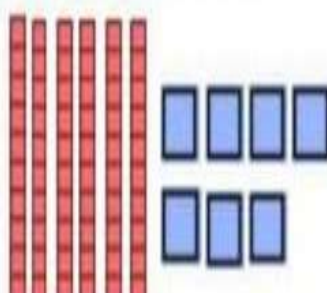

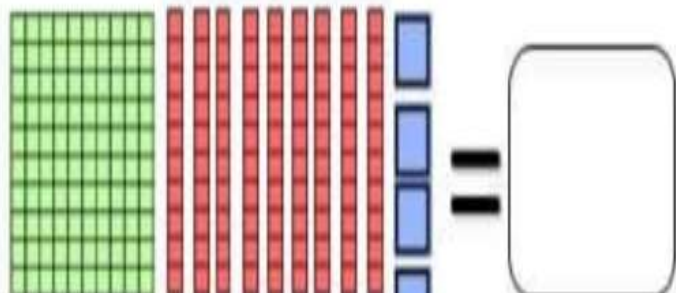
1. Escreva de 5 em 5 do numeral 5 até 100:

2. Agora de 10 em 10 de 10 até 100

3. Complete a tabela:

	D	U	NOMENCLATURA
32	3	2	3 dezenas e 2 unidades
75			
63			
81			
32			
15			
29			

4. Faça a contagem do material dourado e complete com o número formado:

 = <input type="text"/>	 = <input type="text"/>
 = <input type="text"/>	 = <input type="text"/>
 = <input type="text"/>	 = <input type="text"/>

5. Faça as adições:

$$\begin{array}{r} 45 \\ + 43 \\ \hline \end{array}$$

$$\begin{array}{r} 38 \\ + 21 \\ \hline \end{array}$$

$$\begin{array}{r} 67 \\ + 31 \\ \hline \end{array}$$

$$\begin{array}{r} 55 \\ + 12 \\ \hline \end{array}$$

$$\begin{array}{r} 36 \\ + 61 \\ \hline \end{array}$$

$$\begin{array}{r} 73 \\ + 10 \\ \hline \end{array}$$

$$\begin{array}{r} 58 \\ + 31 \\ \hline \end{array}$$

$$\begin{array}{r} 23 \\ + 72 \\ \hline \end{array}$$

$$\begin{array}{r} 64 \\ + 15 \\ \hline \end{array}$$

$$\begin{array}{r} 11 \\ + 17 \\ \hline \end{array}$$

6. Faça um desenho que mostre onde os números aparecem em sua vida: