


Aluno (a):

Nº

RESOLVENDO

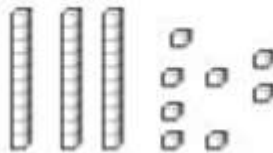

1 - Represente a quantidade do material dourado no Q.V.L

A -





C	D	U
<input type="text"/>	<input type="text"/>	<input type="text"/>

B -



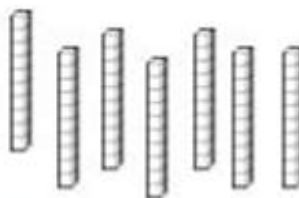

C	D	U
<input type="text"/>	<input type="text"/>	<input type="text"/>

C -



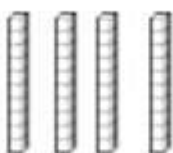

C	D	U
<input type="text"/>	<input type="text"/>	<input type="text"/>

D -



C	D	U
<input type="text"/>	<input type="text"/>	<input type="text"/>


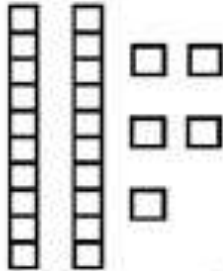
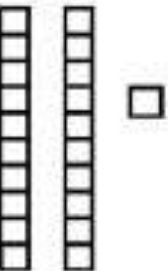
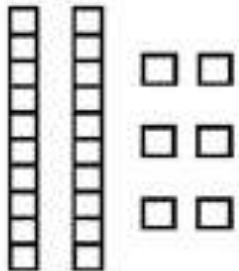
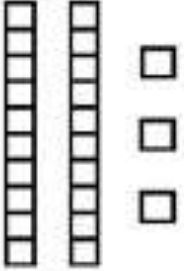
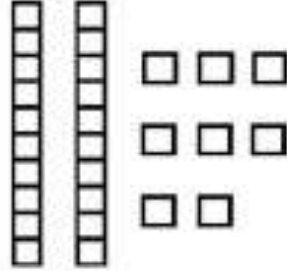
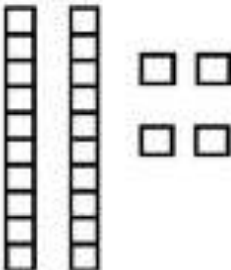
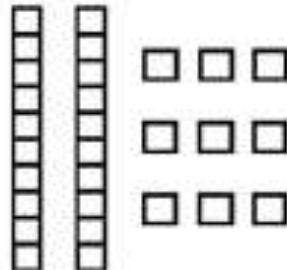
E -



C	D	U
<input type="text"/>	<input type="text"/>	<input type="text"/>

2 – Represente no Q.V.L.

Siga o exemplo:

 <table border="1" data-bbox="502 436 702 582"> <tr> <td>D</td> <td>U</td> </tr> <tr> <td>2</td> <td>0</td> </tr> </table> <p>$20 + 0 = 20$</p>	D	U	2	0	 <table border="1" data-bbox="1141 436 1340 582"> <tr> <td>D</td> <td>U</td> </tr> <tr> <td></td> <td></td> </tr> </table> <p>___ + ___ = ___</p>	D	U		
D	U								
2	0								
D	U								
 <table border="1" data-bbox="502 761 702 907"> <tr> <td>D</td> <td>U</td> </tr> <tr> <td></td> <td></td> </tr> </table> <p>___ + ___ = ___</p>	D	U			 <table border="1" data-bbox="1141 772 1340 918"> <tr> <td>D</td> <td>U</td> </tr> <tr> <td></td> <td></td> </tr> </table> <p>___ + ___ = ___</p>	D	U		
D	U								
D	U								
 <table border="1" data-bbox="502 1108 702 1254"> <tr> <td>D</td> <td>U</td> </tr> <tr> <td></td> <td></td> </tr> </table> <p>___ + ___ = ___</p>	D	U			 <table border="1" data-bbox="1141 1108 1340 1254"> <tr> <td>D</td> <td>U</td> </tr> <tr> <td></td> <td></td> </tr> </table> <p>___ + ___ = ___</p>	D	U		
D	U								
D	U								
 <table border="1" data-bbox="502 1422 702 1568"> <tr> <td>D</td> <td>U</td> </tr> <tr> <td></td> <td></td> </tr> </table> <p>___ + ___ = ___</p>	D	U			 <table border="1" data-bbox="1141 1422 1340 1568"> <tr> <td>D</td> <td>U</td> </tr> <tr> <td></td> <td></td> </tr> </table> <p>___ + ___ = ___</p>	D	U		
D	U								
D	U								