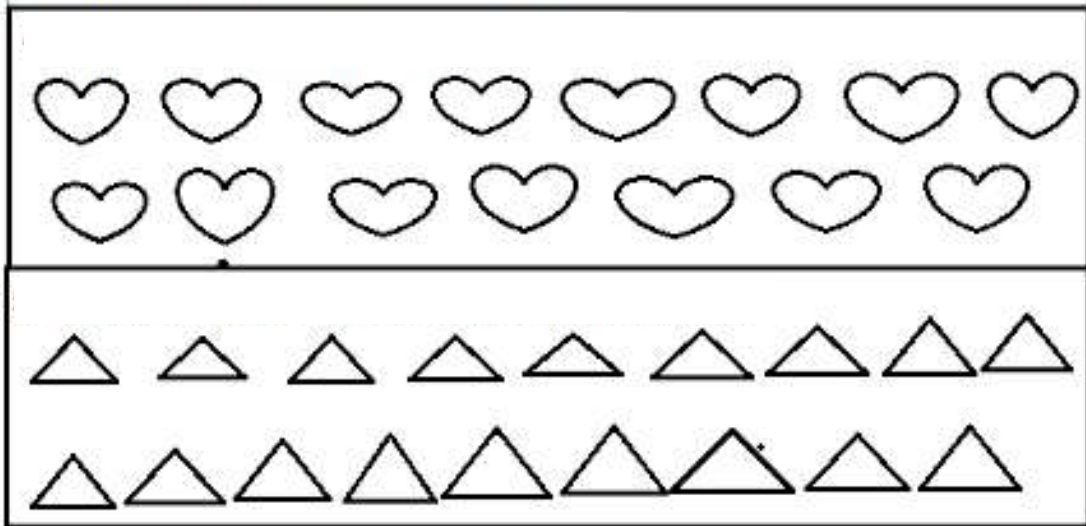


Aluno (a): \_\_\_\_\_

Nº \_\_\_\_\_

1. Pinte uma dúzia de corações e meia dúzia de triângulos:



2. Decomponha os números abaixo:

25

D	U

54

30

D	U

87

7

D	U

90

23

D	U

78


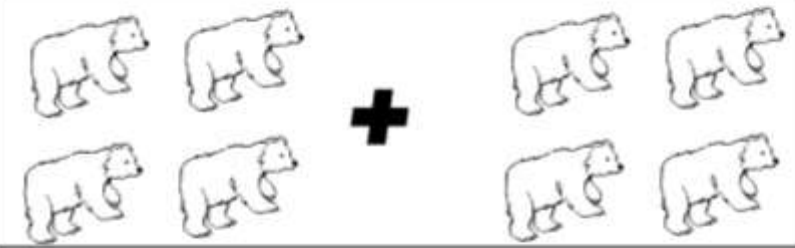

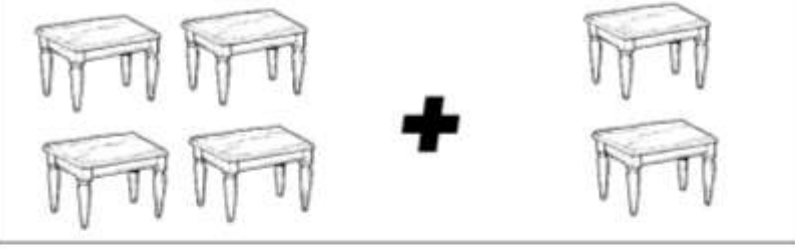
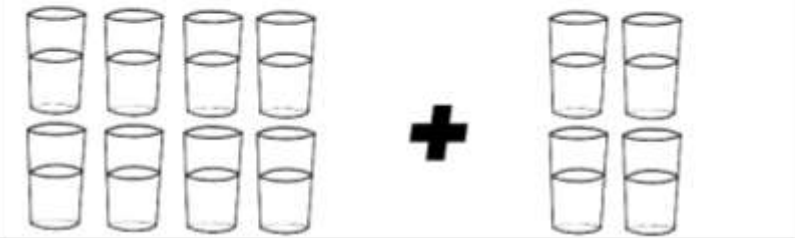
D	U

D	U


D	U


D	U

3. Faça as adições:


	
	
	
	
	

4. Pinte meia dezena de petecas e complete com desenhos, uma dezena de flores.





5. Complete os numerais que estão faltando para completar a sequência de 1 a 20.



6. Antecessor e sucessor, complete:

<input type="text"/>	<input type="text" value="1"/>	<input type="text"/>	<input type="text"/>	<input type="text" value="6"/>	<input type="text"/>
<input type="text"/>	<input type="text" value="10"/>	<input type="text"/>	<input type="text"/>	<input type="text" value="4"/>	<input type="text"/>
<input type="text"/>	<input type="text" value="7"/>	<input type="text"/>	<input type="text"/>	<input type="text" value="16"/>	<input type="text"/>
<input type="text"/>	<input type="text" value="18"/>	<input type="text"/>	<input type="text"/>	<input type="text" value="9"/>	<input type="text"/>
<input type="text"/>	<input type="text" value="3"/>	<input type="text"/>	<input type="text"/>	<input type="text" value="2"/>	<input type="text"/>
<input type="text"/>	<input type="text" value="15"/>	<input type="text"/>	<input type="text"/>	<input type="text" value="14"/>	<input type="text"/>
<input type="text"/>	<input type="text" value="12"/>	<input type="text"/>	<input type="text"/>	<input type="text" value="8"/>	<input type="text"/>
<input type="text"/>	<input type="text" value="5"/>	<input type="text"/>	<input type="text"/>	<input type="text" value="17"/>	<input type="text"/>