

Aluno (a):




Nº



PARA CASA

Que legal! Adição!

1. Conte a quantidade de flores, realize a soma e registre o total.



2. Escreva a sequência numérica de 0 a 20:

| | | | | | | | | | |
|---|--|--|--|--|--|--|--|--|--|
| 0 | | | | | | | | | |
| | | | | | | | | | |
| | | | | | | | | | |