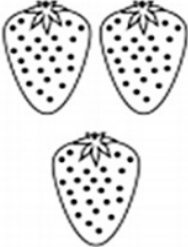













Aluno (a): _____

Nº _____


1. Vamos somar as frutas. E depois, você pode colorir.

 $3 + 4 = \square$	 $2 + 3 = \square$	 $2 + 3 = \square$	 $2 + 3 = \square$
 $1 + 2 = \square$	 $5 + 5 = \square$	 $5 + 5 = \square$	 $5 + 5 = \square$
 $7 + 8 = \square$	 $4 + 6 = \square$	 $4 + 6 = \square$	 $4 + 6 = \square$

2. Complete até chegar a **1 Duzena**, que corresponde à 10 unidades.



3. Pinte **Meia Duzena** dos elementos. Que corresponde à 5 unidades.



Você é muito especial!