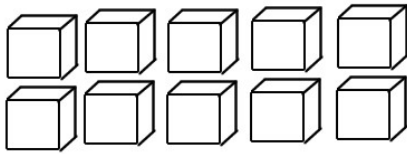


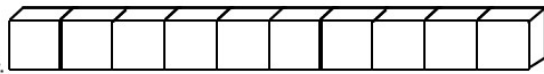
Aluno (a): _____

Nº _____

DEZENAS E UNIDADES



10 Unidades



1 Dezena

1 - Complete os quadros:

	D	U
25		
18		
93		
36		
78		
15		
46		



	D	U
	8	6
	3	2
	4	7
	1	2
	9	0
	7	3
	2	5

2 - Decomponha os numerais em dezenas e unidades:

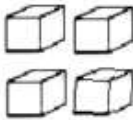
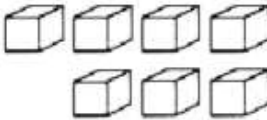
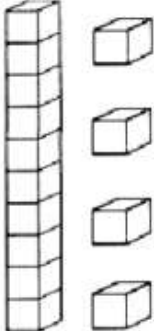

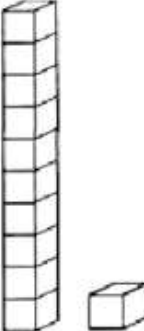

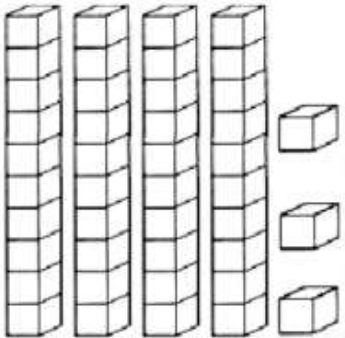



35 trinta e cinco - 3 dezenas e 5 unidades

76 _____

19 _____

93 _____

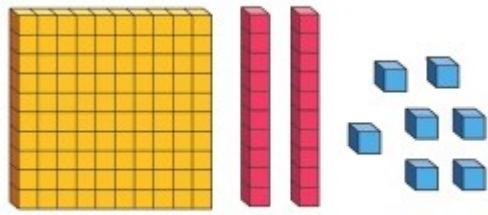
3- Vamos completar corretamente com as dezenas e unidades:

	<table border="1"><tr><td>D</td><td>U</td></tr><tr><td> </td><td> </td></tr></table>	D	U				<table border="1"><tr><td>D</td><td>U</td></tr><tr><td> </td><td> </td></tr></table>	D	U		
D	U										
D	U										
	 <table border="1"><tr><td>D</td><td>U</td></tr><tr><td> </td><td> </td></tr></table>	D	U				 <table border="1"><tr><td>D</td><td>U</td></tr><tr><td> </td><td> </td></tr></table>	D	U		
D	U										
D	U										
	 <table border="1"><tr><td>D</td><td>U</td></tr><tr><td> </td><td> </td></tr></table>	D	U				 <table border="1"><tr><td>D</td><td>U</td></tr><tr><td> </td><td> </td></tr></table>	D	U		
D	U										
D	U										

CENTENAS, DEZENAS E UNIDADES

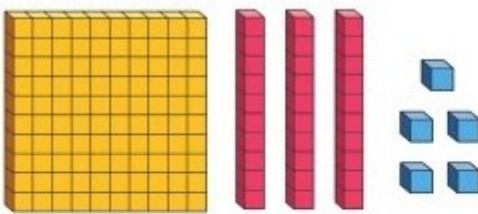
		
Placa	Barra	Cubinho
1 centena ou 10 dezenas ou 100 unidades	1 dezena ou 10 unidades	1 unidade

Vamos completar seguindo o modelo:



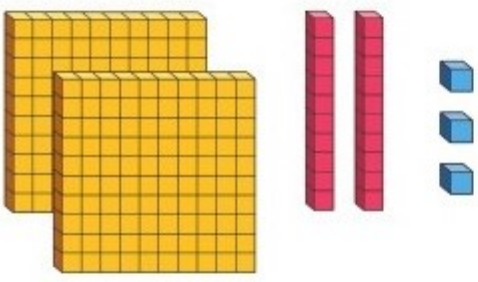
Centenas	Dezenas	Unidades
1	2	7
127		

a)



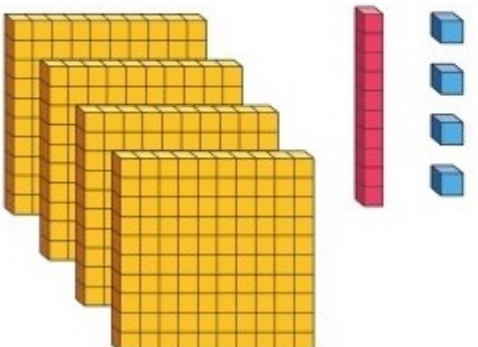
Centenas	Dezenas	Unidades

b)



Centenas	Dezenas	Unidades

c)



Centenas	Dezenas	Unidades

Decomponha os números:

Siga o modelo.

	CENTENA	DEZENA	UNIDADE
225	200	20	5
387			
41			
934			
108			
596			

Decomponha os números conforme o exemplo:

- a) **1 centena, 2 dezenhas e 9 unidades = 129**
- b) 3 centenas, 6 dezenhas e 1 unidade = _____
- c) 5 centenas, 7 dezenhas e 3 unidades = _____
- d) 2 centenas, 9 dezenas e 8 unidades = _____
- e) 4 centenas, 3 dezenas e 5 unidades = _____
- f) 7 centenas, 5 dezenas e 2 unidades = _____
- g) 6 centenas, 4 dezenas e 6 unidades = _____