

Aluno (a): \_\_\_\_\_

Nº \_\_\_\_\_

1- Decomponha no QVL:

	CENTENAS	DEZENAS	UNIDADES
260			
123			
189			
247			
384			
421			



2- Decomponha por extenso:

543 – \_\_\_\_\_

\_\_\_\_\_

974 – \_\_\_\_\_

\_\_\_\_\_

212 – \_\_\_\_\_

\_\_\_\_\_

555 – \_\_\_\_\_

\_\_\_\_\_

3- Escreva de 2 em 2 até 20:

\_\_\_\_\_

\_\_\_\_\_






\_\_\_\_\_






\_\_\_\_\_






\_\_\_\_\_

\_\_\_\_\_

4- Resolva as adições:

	+	<input type="text"/>			+	<input type="text"/>
		<input type="text"/>				<input type="text"/>
		<input type="text"/>				<input type="text"/>

	+	<input type="text"/>			+	<input type="text"/>
		<input type="text"/>				<input type="text"/>
		<input type="text"/>				<input type="text"/>

	+	<input type="text"/>			+	<input type="text"/>
		<input type="text"/>				<input type="text"/>
		<input type="text"/>				<input type="text"/>