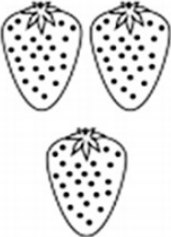













Aluno (a):

Nº

1- Faça as adições com atenção:

 $3 + 4 = \square$	 $2 + 3 = \square$	 $2 + 3 = \square$	 $2 + 3 = \square$
 $1 + 2 = \square$	 $5 + 5 = \square$	 $5 + 5 = \square$	 $5 + 5 = \square$
 $7 + 8 = \square$	 $4 + 6 = \square$	 $4 + 6 = \square$	 $4 + 6 = \square$

2- Escreva de 70 até 89
