




Aluno (a): \_\_\_\_\_

Nº \_\_\_\_\_

Let's Review the number!

1. Write the numbers that comes before, between and after each number:

Before	Between	After
___ 8	1 ___ 3	6 ___
___ 17	20 ___ 22	13 ___
___ 12	8 ___ 10	29 ___
___ 1	14 ___ 16	34 ___
___ 20	31 ___ 33	17 ___
___ 44	19 ___ 21	42 ___
___ 65	11 ___ 13	39 ___

2. Let's do some math! Answer then read it to the classroom:

- $15 + 10 =$  \_\_\_\_\_ plus \_\_\_\_\_ equals \_\_\_\_\_
- $35 - 15 =$  \_\_\_\_\_ minus \_\_\_\_\_ equals \_\_\_\_\_
- $10 + 27 =$  \_\_\_\_\_ plus \_\_\_\_\_ equals \_\_\_\_\_
- $49 - 7 =$  \_\_\_\_\_ minus \_\_\_\_\_ equals \_\_\_\_\_
- $34 + 26 =$  \_\_\_\_\_ plus \_\_\_\_\_ equals \_\_\_\_\_
- $8 - 6 =$  \_\_\_\_\_ minus \_\_\_\_\_ equals \_\_\_\_\_